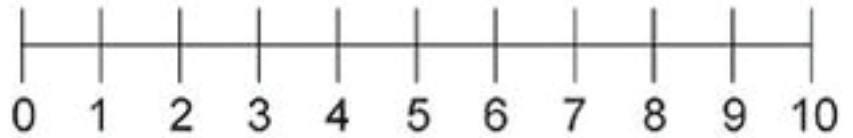


Count the lines and write correct Answer

$2 + 3 = \boxed{5}$



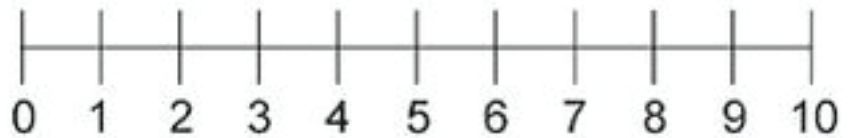
$3 + 1 = \boxed{}$



$1 + 8 = \boxed{}$



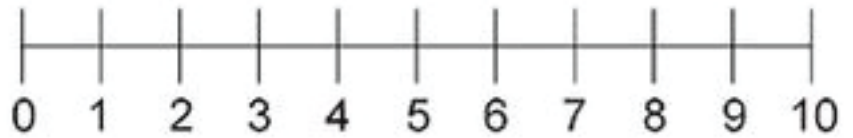
$5 + 5 = \boxed{}$



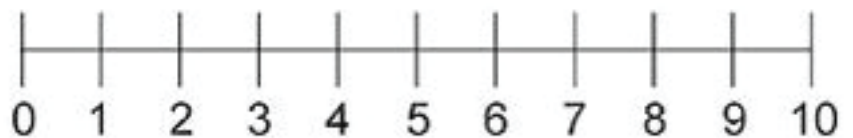
$4 + 2 = \boxed{}$



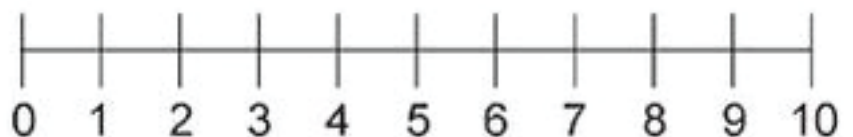
$3 + 4 = \boxed{}$



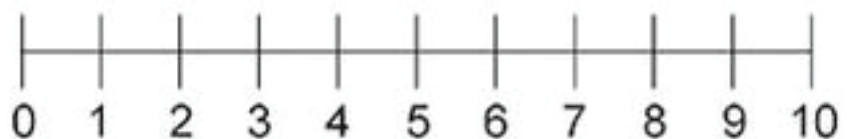
$9 + 1 = \boxed{}$



$2 + 2 = \boxed{}$



$1 + 4 = \boxed{}$



$3 + 7 = \boxed{}$

